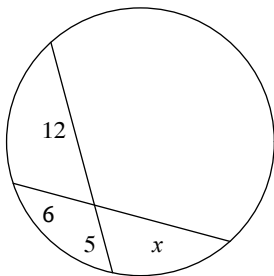


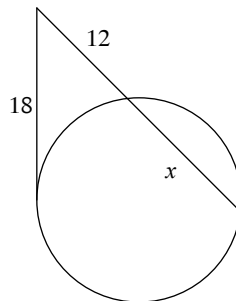
WS Solving Segment Length

Solve for x . Assume that lines which appear tangent are tangent.

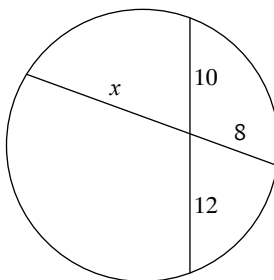
1)



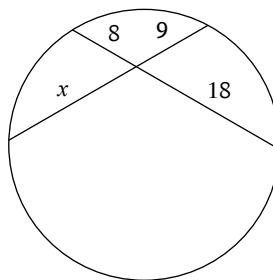
2)



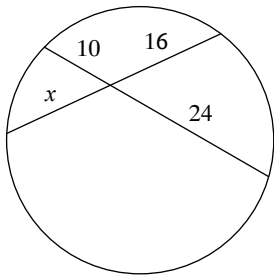
3)



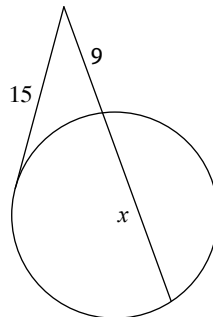
4)



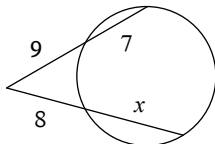
5)



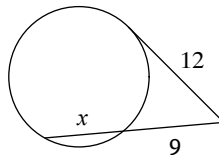
6)



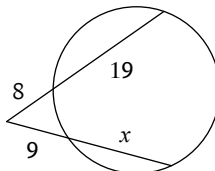
7)



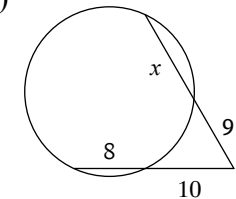
8)



9)



10)



Answers to WS Solving Segment Length

1) 10

5) 15

9) 15

2) 15

6) 16

10) 11

3) 15

7) 10

4) 16

8) 7